

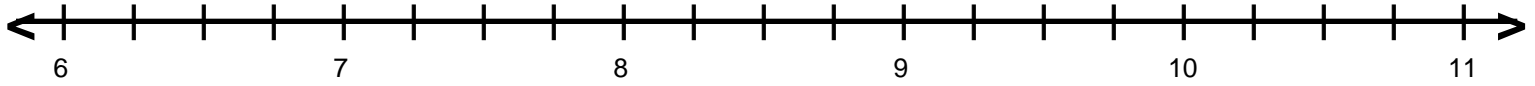
Name : _____

Score : _____

Teacher : _____

Date : _____

Decimal Numbers on Number Lines

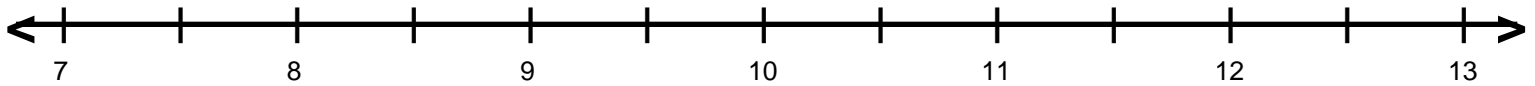


A = 6.5

B = 9.75

C = 7.25

D = 8.25

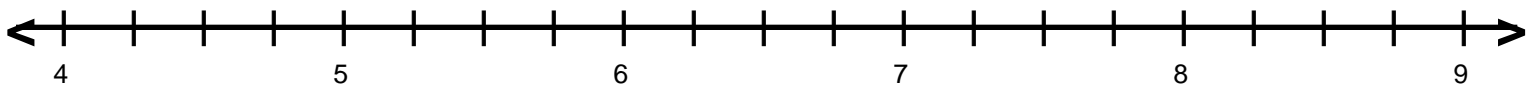


A = 11.5

B = 8.5

C = 10.5

D = 9.5

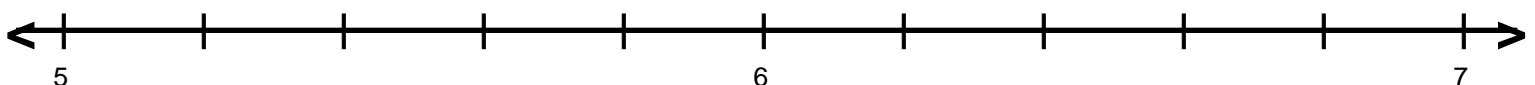


A = 4.75

B = 7.25

C = 5.25

D = 6.5

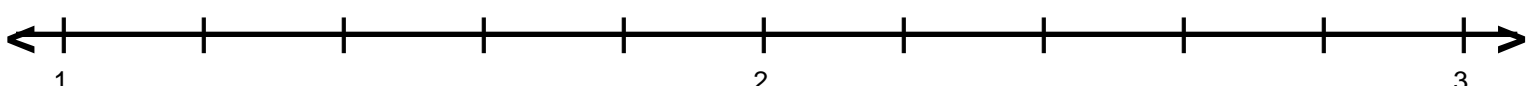


A = 6.8

B = 6.6

C = 5.4

D = 5.2



A = 1.6

B = 2.8

C = 2.2

D = 1.4

