


Name : _____

Score : _____

Teacher : _____

Date : _____

Fractions on Number Lines

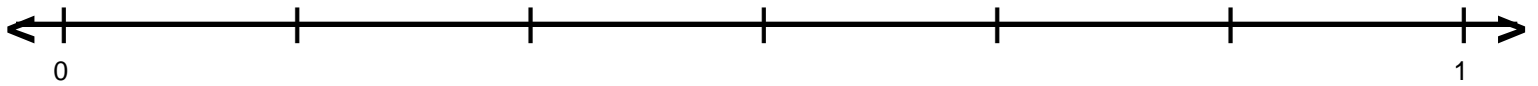


A = $\frac{4}{7}$

B = $\frac{5}{7}$

C = $\frac{1}{7}$

D = $\frac{3}{7}$

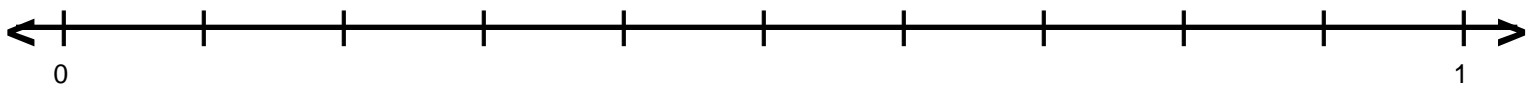


A = $\frac{2}{3}$

B = $\frac{1}{3}$

C = $\frac{1}{6}$

D = $\frac{5}{6}$

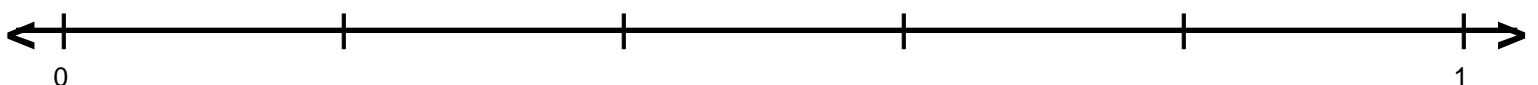


A = $\frac{9}{10}$

B = $\frac{1}{10}$

C = $\frac{3}{10}$

D = $\frac{7}{10}$

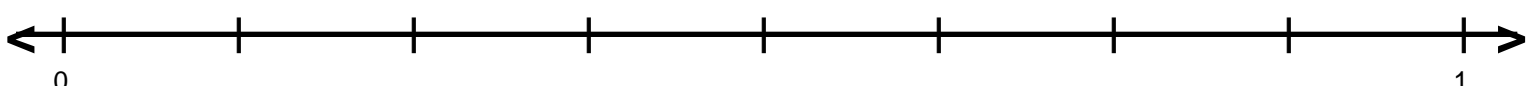


A = $\frac{2}{5}$

B = $\frac{3}{5}$

C = $\frac{1}{5}$

D = $\frac{4}{5}$



A = $\frac{3}{8}$

B = $\frac{1}{8}$

C = $\frac{5}{8}$

D = $\frac{7}{8}$

